



ARMY BURN HALL COLLEGE FOR GIRLS ABBOTTABAD

ENTRANCE TEST

CLASS: ONE

SUBJECT: Maths

TIME: 1Hr

NAME: _____

MAX MARKS: 50

	1	2	3	4	5	6	7	8	9	10	Total
marks	5	10	5	10	4	2	2	5	5	2	50
Marks											

Q1. Write the missing numbers. (5)

22 _____ 24 _____ 26 _____ 28 _____ 30 _____ 32 _____ 34
 _____ 36 _____ 38 _____ 40

Q2. Write in words. (10)

11 _____

12 _____

13 _____

14 _____

15 _____






















16 _____

17 _____

18 _____

19 _____

Q3. Write backward counting. (5)

Q4. Write table of 2. (10)

Q5. Count and write. (4)



Q6. Write any two 2D shapes. (2)

1. _____
























2. _____

Q7. Write any two 3D shapes. (2)






























1. _____

2. _____

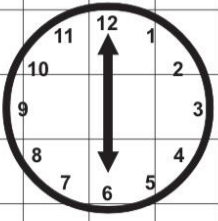
Q8. Add. (5)

	+		=	<input style="width: 40px; height: 20px;" type="text"/>
			+	
			=	<input style="width: 40px; height: 20px;" type="text"/>
			+	
			=	<input style="width: 40px; height: 20px;" type="text"/>
				
			+	
			=	<input style="width: 40px; height: 20px;" type="text"/>
			+	
			=	<input style="width: 40px; height: 20px;" type="text"/>

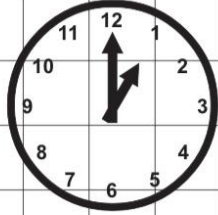
Q9. Subtract. (5)

		8			5
		- 3			- 4
		<hr style="width: 60px; border: 1px solid black;"/>			<hr style="width: 60px; border: 1px solid black;"/>
					
					
					
		6			5
		- 4			- 3
		<hr style="width: 60px; border: 1px solid black;"/>			<hr style="width: 60px; border: 1px solid black;"/>
					
					
					
		9			
		- 2			
		<hr style="width: 60px; border: 1px solid black;"/>			
					
					
					

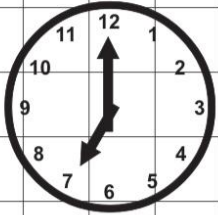
Q10. Match the clock. (2)



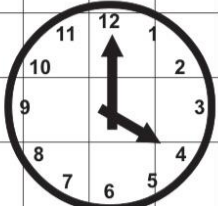
1:00



7:00



4:00



6:00